

# ST. ANDREWS SCOTS SCHOOL

Adjacent Navniti Apartments I.P.Extension, Patparganj, Delhi-110092

Session 2025-2026


## Class IV:- SUMMER HOLIDAY HOMEWORK



## ENGLISH

- Make a thin notebook for Holiday Homework.
- Take a printout of worksheets and paste it in your English notebook.
- Do your work neatly.

1. Always speak in English.
2. Have a balanced diet.
3. Help your Parents and Grandparents in their household work.
4. Read English Newspaper daily
5. Write five main news in your Holiday Homework notebook in good handwriting for 15 days.
6. Make a 'Gratitude Card' for your father on Father's Day by expressing your love.
7. Observe the given picture and write 7-8 lines on it



8. Complete all your pending work.
9. Revise P.A - 1 syllabus.
10. Write a paragraph in your thin notebook.

a) An ideal student

**OR**

b) Good habits

# **ST. ANDREWS SCOTS SCHOOL**

**Adjacent Navniti Appartments I.P. Extension, Patparganj, Delhi-110092**

**Session 2025-26**

**Class : IV**

**Worksheet – Nouns Gender**

**Subject : English**

## **Kinds of Gender**

1. Masculine gender - E.g. son, father, peacock, dog.
2. Feminine gender -E.g. sister, aunt, daughter, madam.
3. Neuter gender - E.g. bat, chair, pencil, house.
4. Common gender –E.g. teacher, doctor, player, friend.

<b>Masculine</b>	<b>Feminine</b>
1. Tiger	
2. Fox	
3. Nephew	
4. Son	
5. Prince	
6. Husband	
7. Horse	
8. Sir	
9. Bull	
10. Master	
11. Waiter	
12. Gentleman	
13. Emperor	
14. Hero	
15. Buck	

## MATHEMATICS

- Complete the work of Unit -1, 2 & 3 in Maths notebook.
- Do practice of Unit-1 & 2 in practice notebook.
- Learn the tables properly from 2 to 20.

### Activity

Draw solid shapes on a chart paper and write number of edges, vertices and faces it has.(use colors for attractive presentation)

### Mental Math's Corner

Fill in the blanks using Roman numerals

1. I celebrate my birthday on \_\_\_\_\_ of \_\_\_\_\_(month).
2. I am \_\_\_\_\_ years old.
3. I study in class\_\_\_\_\_.
4. My class has \_\_\_\_\_students.

### Real Life Connect

You went to purchase some furniture with your father. You bought a sofa set, an Almira and a dining table. If a sofa set costs ₹ 18, 520, an Almira costs ₹ 19,450 and dining table costs ₹ 11, 380, how much money did your father spend that day?

# **ST. ANDREWS SCOTS SCHOOL**

**Adjacent Navniti Appartments I.P. Extension, Patparganj, Delhi-110092**

**Session 2025-26**

Class : IV

Worksheet

Subject : Maths

## **Q1 Choose the correct option:-**

- a) The sum of the place values of two 4s in 401406 is \_\_\_\_\_  
i) 400400      ii) 400000      iii) 440000      iv) 80000
- b) 100 more than 99999 equals \_\_\_\_\_  
i) 10099      ii) 100099      iii) 99099      iv) 100000
- c) Predecessor of the greatest 5-digit number is \_\_\_\_\_  
i) 10099      ii) 99998      iii) 98989      iv) 99990
- d) Round off 32756 to the nearest hundreds is equals to -  
i) 32700      ii) 32760      iii) 32800      iv) 32000

## **Q2. Fill in the blanks:-**

- a) \_\_\_\_\_ can be subtracted. from L and C only once.
- b)  $25535 - \underline{\hspace{2cm}} = 25534$
- c)  $(7836 + 5926) + 1132 = 7836 + (5926 + \underline{\hspace{2cm}})$

Q3. Write smallest and greatest 6-digits number using the digits each only once – 7, 2, 0, 1, 3, 9

Q4. Round off 850369 to the nearest tens, hundreds and thousands.

Q5. A biscuits factory produce 3,70, 527 packets in the first year 5,89,280 in second year and 8,15,117 packets of biscuits in third year , find total production of biscuit in all three years.

## **SCIENCE**

1. Collect information about food preservation and different methods of it.

Paste pictures of different methods of food preservation and write briefly about them in your scrapbook.

2. Make a collage of pictures of variety of food that comes under balanced diet and write benefits of eating balanced diet in your scrapbook.
3. Make a poster on A4 size sheet on the topic “Tooth Care”.
4. Make different types of teeth using modelling clay and paste them in your scrapbook. Complete and learn all the work of L-1, 2 and 3 done in the class and practice all the diagrams.

Take out the printout of the worksheet. Paste and do worksheet in your Science notebook.

**ST. ANDREWS SCOTS SCHOOL**

**Adjacent Navniti Appartments I.P. Extension, Patparganj, Delhi-110092**

**Session 2025-26**

**Class : IV**

**Worksheet**

**Subject : Science**



### Q1) Fill in the blanks

- \_\_\_\_\_ are the smallest microbes.
- Bile juice is secreted by \_\_\_\_\_.
- Disease-causing microbes are called \_\_\_\_\_.

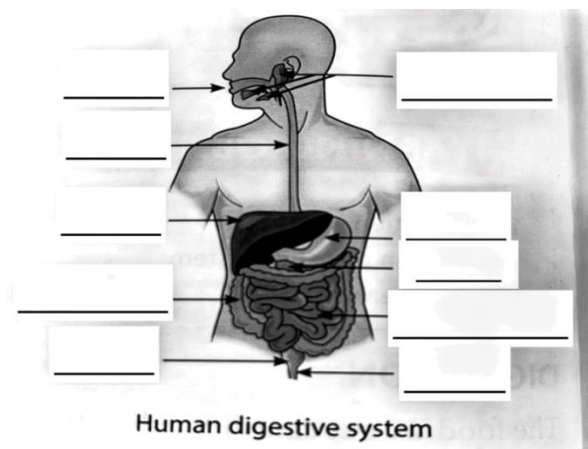
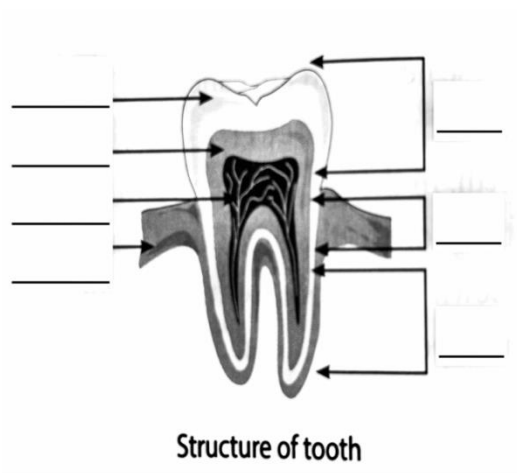
### Q2). True or False

- Crown, neck and root are the three parts of a tooth. \_\_\_\_\_
- The undigested food passes in the small intestine. \_\_\_\_\_
- At the age of four, a child has 32 teeth. \_\_\_\_\_

### Q3) Name them

- A teeth help to tear food. \_\_\_\_\_
- Two protective food items. \_\_\_\_\_
- We can see microbes through it. \_\_\_\_\_

### Q4) Label the following diagrams.



## SOCIAL SCIENCE

- Do the holiday homework in a scrap book.

## **ST. ANDREWS SCOTS SCHOOL**

**Adjacent Navniti Appartments I.P. Extension, Patparganj, Delhi-110092**

**Session 2025-26**

**Class : IV**

**Worksheet – (L-5 & 6)**

**Subject : Social Science**

1. Visit any one monument, click and paste pictures in scrap book and write few lines about it.
2. Spend time with your grandparents.
3. Learn the national anthem properly and sing it with proper intonation in 52 seconds.
4. Keep your surroundings clean.
5. Plant a sapling and take care of it daily.

### **Learning**

Learn all the work done in the class.

### **Q1.Fill in the blanks**

- i. \_\_\_\_\_ is a route through a mountain range.
- ii Tea and coffee are grown along the slopes of \_\_\_\_\_ the hills.
- iii The main tributary of river Ganga is \_\_\_\_\_

### **Q2.Correct the statement by changing the underlined words.**

- iAssam is famous for its beautiful beaches.

---



ii Mizoram is located in the Himalayas.

---

**Q3. Answer in one word**

i The state famous for brassware.

---

ii. Fine silt deposited by rivers along its bank.

---

iii Garden consisting of small cultivated wood without undergrowth.

---

**HINDI**

१. "मेरा मनपसंद खेल" इस विषय पर 50 से 60 शब्दों में अनुच्छेद लिखिए ।

२. पाँच अलग-अलग राज्यों के त्यौहारों तथा उनके मनाने के तरीकों को पर 8 से 10 पंक्तियाँ लिखिए तथा उनसे संबंधित चित्र भी चिपकाएँ ।

३. अपने अपने घर के आसपास या घर में आसानी से पाए जाने वाले पौधों के नाम लिखिए तथा उनसे होने वाले लाभों के विषय में भी बताइए।

५- अब तक कराए गए पाठों का अभ्यास कीजिए व प्रतिदिन अपने पाठ्यपुस्तक का एक पृष्ठ पढ़िए।

प्रश्न संख्या 1 से 3 तक सभी कार्य A4 साइज शीट पर करिए ।

कार्यपत्रिका का प्रिंटआउट निकालकर उसे पूरा करके अपनी हिंदी कार्य पुस्तिका में लगाइए।

## कार्यपत्रिका

### सेंट एंड्रयूज़ स्कॉट्स स्कूल

आई.पी.एक्स पटपड़गंज दिल्ली-११००९२

सत्र: २०२५-२०२६

कक्षा-चार विषय-हिंदी व्याकरण(भाषा , संज्ञा ) (कार्य पत्रिका)

प्रश्न-शरिक्त स्थान भरो।

- क) समाचार पत्र ,पुस्तक, पोस्टर ,पत्रआदि \_\_\_\_\_ भाषा के ही साधन है।
- ख) किसी बात को हम \_\_\_\_\_ और \_\_\_\_\_ समझते हैं।
- ग) हमारे देश में \_\_\_\_\_ भाषा सबसे अधिक बोली जाती है।
- घ) संविधान द्वारा स्वीकृत कुल \_\_\_\_\_ भाषाएँ हैं।
- ङ) संज्ञा के \_\_\_\_\_ भेद होते हैं।
- च) ताजमहल \_\_\_\_\_ संज्ञा का उदाहरण है।

प्रश्न-२ सही उत्तर पर सही (✓) का निशान लगाए।

- क) महाराष्ट्र में (मराठी / असमिया) बोली जाती है।
- ख) अंग्रेजी (अंतरराष्ट्रीय / राष्ट्रीय) भाषा है।

प्रश्न-३ निम्नलिखित वाक्यों में संज्ञा शब्द रेखांकित करके भेद बताइए।

- क) उसकी वाणी में मिठास थी।
- ख) हम सोमवार को परीक्षा देने जाएँगे।
- ग) ताजमहल सफ़ेद संगमरमर से बना है।
- घ) प्रतियोगिता में सभी बच्चों ने अच्छा प्रदर्शन किया।

## **COMPUTER**

1. Complete L-1 & 2 in Book & Notebook.
2. Learn L-1 & 2.

### **ACTIVITY**

#### **Story with Shapes!**

In **MS Word or on paper**, create a mini story using **shapes**.

Example:

A triangle as a mountain

A circle as the sun

A rectangle as a house

Write 3–4 sentences describing your story! Also use any word art style for the heading of your story. Save your file with your name and section and send me

on my Mail ID ([kishaabrol@gmail.com](mailto:kishaabrol@gmail.com))

**If you don't have a computer, draw on Paper and label the elements.**

**Solve the below worksheet and Paste it in Computer Notebook.**

# **ST. ANDREWS SCOTS SCHOOL**

**Adjacent Navniti Appartments I.P. Extension, Patparganj, Delhi-110092**

**Session 2025-26**

**Class : IV**

**Worksheet**

**Subject : Computer**

## **Q.1 One Word:**

1. Where is the Quick Launch Bar located ? \_\_\_\_\_
2. Which effect adds thickness and rounded edges to shapes ? \_\_\_\_\_
3. What are the punctuations or special characters ? \_\_\_\_\_
4. What represents stored information that you have named ? \_\_\_\_\_

## **Q.2 Short cut keys:**

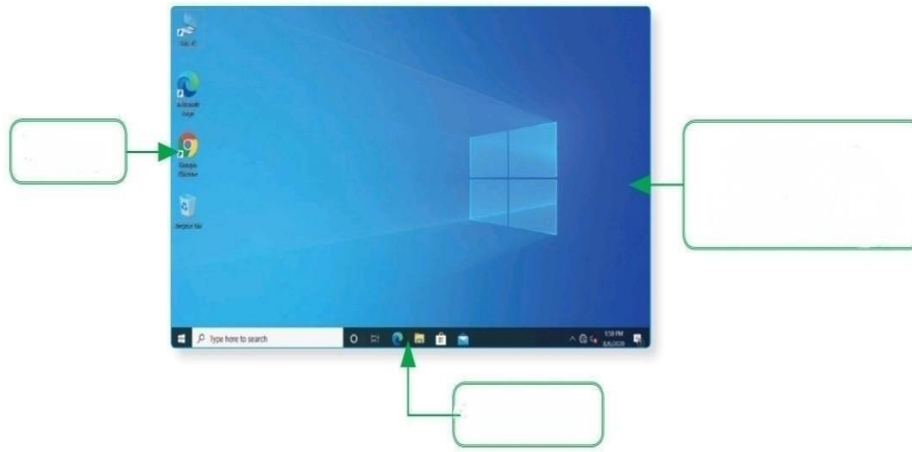
1. To Copy the text \_\_\_\_\_
2. To Select whole text \_\_\_\_\_
3. To Bold \_\_\_\_\_
4. To Italic \_\_\_\_\_
5. To Underline \_\_\_\_\_

## **Q.3 Web chart :**

1. Write 3D effects in Word

2. Two Panes of Start menu

## **Q.4 Label the components of Window 10:**



## **ART & CRAFT:-**

1. Make an innovative flower pot & decorate it beautifully.
2. Complete Page no. 3 – 20 of Fusion and Fission Art & Craft Book. 😊

## **LIBRARY**

### Reading Activity

1. Develop a habit of reading bedtime stories.
2. Choose 2 funny and 2 mystery stories to start with.
3. Maintain a notebook (you can use a thin one for Rs.5) to jot down.
  - New words you learn from the stories.
  - Interesting thoughts or insights you gain from the narratives.

This activity will help you improve your vocabulary, comprehension, and Critical thinking skills while enjoying engaging stories!

